


Grade 2 Samples:

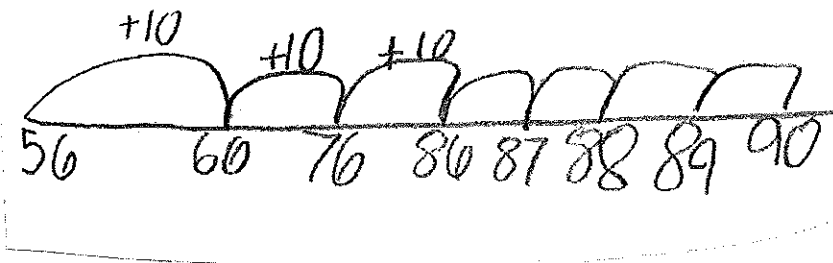
It snowed 56 inches on Wednesday. It snowed again on Thursday! In all it snowed 90 inches during the two days. How many inches did it snow on Thursday?

Student 1:



$$90 - 56 = 34$$

Student 2:



Student 3:

$$56 + 34 = 90$$

$$\begin{array}{r} 56 + 10 = 66 \\ \hline \end{array}$$

$$\begin{array}{r} 76 + 10 = 86 \\ 86 + 4 = 90 \end{array}$$

$$\begin{array}{r} 66 + 10 = 76 \\ \hline \end{array}$$

$$10 + 10 + 10 + 4 = 34$$

It snowed 56 inches on Wednesday. It snowed again on Thursday! In all it snowed 90 inches during the two days. How many inches did it snow on Thursday?


Student 4:

$$56 + 34 = 90$$



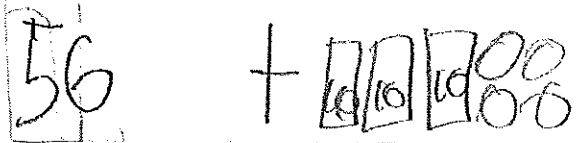
Student 5:

$$56 + 34 = 90$$




Student 6:

$$56 + 34 = 90$$



Student 7:

$$56 + 24 = 90$$



It snowed 56 inches on Wednesday. It snowed again on Thursday! In all it snowed 90 inches during the two days. How many inches did it snow on Thursday?

Student 8:

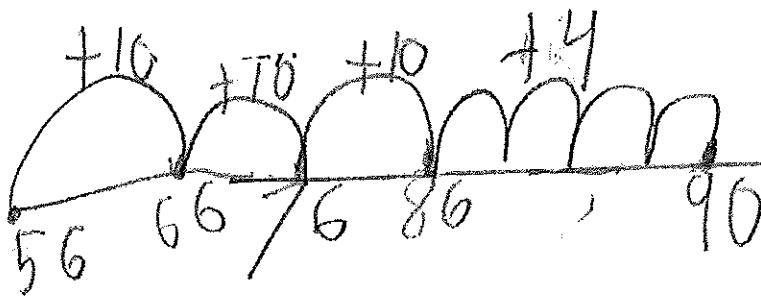
$$56 + 44 = 90 \quad 86 + 4 = 90$$

$$56 + 10 = 66$$

$$66 + 10 = 76$$

$$66 + 20 = 86$$

Student 9:



$$56 + 34 = 90$$

Student 10:

$$56 + 90 = 10036$$

$$90 + 10 = 100$$

$$100 + 10 = 10010$$

$$10010 + 10 = 10020$$

$$10020 + 10 = 10030 \quad \text{|||||} \quad 10036$$