

Hundred Chart Rules

Fill in the missing number for each Hundred Chart piece. Write the rule after each group.

a.

63	
-----------	--

91	
-----------	--

14	
-----------	--

Rule:

b.

	48
--	-----------

	80
--	-----------

	96
--	-----------

Rule:

c.

33

86

21

Rule:

d.

84

50

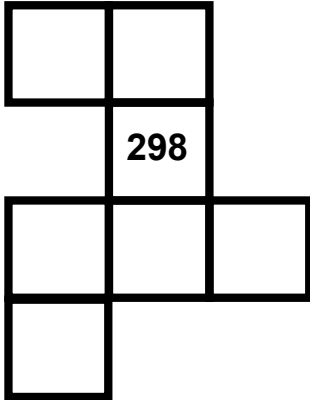
24

Rule:

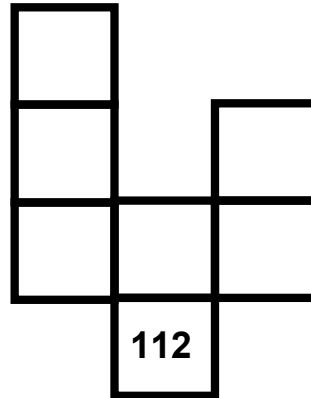
Hundred Chart Challenge

Fill in the missing numbers. Think about the patterns. Create a Hundred Chart piece of your own on the dotted grid.

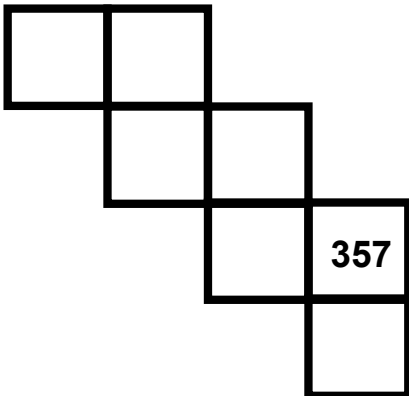
a



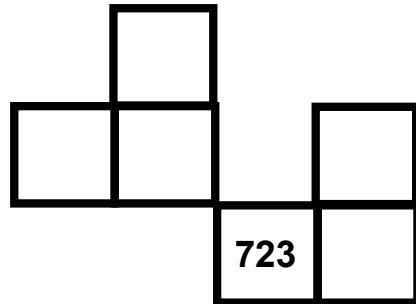
b



c



d



e

