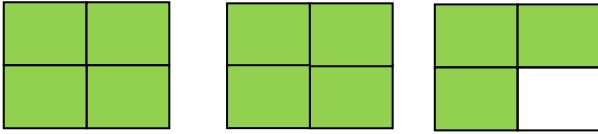



## Numbers Greater Than One

How much is shaded? Write your answer two ways.

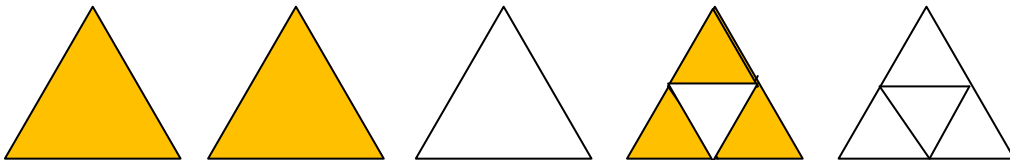
a.



b.



c.



d.



e. Show how you would prove that  $2\frac{1}{4}$  is the same amount as  $\frac{9}{4}$ .